

Time _____

Name _____

Pick-Up Notes Worksheet

Circle the measure with pick-up notes

1



2



3



4



5



6



7



8



9



10



11




12



13



14



15



16



17



18



19



20




21



22



23



24



25





26





Time _____ Name _____


Lesson 15. Multi-rests


1. $\frac{4}{4}$  Count to _____ , _____ times


2. $\frac{2}{4}$  Count to _____ , _____ times


3. $\frac{3}{4}$  Count to _____ , _____ times


4. $\frac{5}{4}$  Count to _____ , _____ times


5. $\frac{4}{4}$  Count to _____ , _____ times

6. $\frac{3}{4}$  Count to _____ , _____ times

7. $\frac{6}{4}$  Count to _____ , _____ times

8. $\frac{8}{4}$  Count to _____ , _____ times


9. $\frac{2}{4}$  Count to _____ , _____ times


10. $\frac{5}{4}$  Count to _____ , _____ times


Time _____


Name _____


Lesson 15. Multi-rests Worksheet 2


1. $\frac{4}{4}$ **3**  Count to _____, _____ times. Total counts _____


2. $\frac{2}{4}$ **6**  Count to _____, _____ times. Total counts _____


3. $\frac{3}{4}$ **12**  Count to _____, _____ times. Total counts _____


4. $\frac{5}{4}$ **10**  Count to _____, _____ times. Total counts _____


5. $\frac{4}{4}$ **12**  Count to _____, _____ times. Total counts _____

6. $\frac{3}{4}$ **5**  Count to _____, _____ times. Total counts _____

7. $\frac{6}{4}$ **4**  Count to _____, _____ times. Total counts _____

8. $\frac{8}{4}$ **2**  Count to _____, _____ times. Total counts _____

9. $\frac{2}{4}$ **20**  Count to _____, _____ times. Total counts _____

10. $\frac{5}{4}$ **13**  Count to _____, _____ times. Total counts _____