

Basic Elements of Music

(Video tutorial <https://www.stephenhillcomposer.com/copy-of-video-lessons-basic-element>)

Time _____

Name _____

Note Names Ledger Lines and Spaces - Speed Sheet 1 (Treble)

Write the letter name below the note.

1 2 3 4 5 6 7 8 9

A musical staff with a treble clef. It contains nine notes: 1. G4 (space 1), 2. A4 (space 2), 3. B4 (space 3), 4. C5 (space 4), 5. D5 (space 5), 6. E5 (space 6), 7. F5 (space 7), 8. G5 (space 8), 9. A5 (space 9).

10 11 12 13 14 15 16 17 18

A musical staff with a treble clef. It contains nine notes: 10. B4 (space 3), 11. C5 (space 4), 12. D5 (space 5), 13. E5 (space 6), 14. F5 (space 7), 15. G5 (space 8), 16. A5 (space 9), 17. B5 (space 10), 18. C6 (space 11).

19 20 21 22 23 24 25 26 27

A musical staff with a treble clef. It contains nine notes: 19. D5 (space 5), 20. E5 (space 6), 21. F5 (space 7), 22. G5 (space 8), 23. A5 (space 9), 24. B5 (space 10), 25. C6 (space 11), 26. D6 (space 12), 27. E6 (space 13).

28 29 30 31 32 33 34 35 36

A musical staff with a treble clef. It contains nine notes: 28. F5 (space 7), 29. G5 (space 8), 30. A5 (space 9), 31. B5 (space 10), 32. C6 (space 11), 33. D6 (space 12), 34. E6 (space 13), 35. F6 (space 14), 36. G6 (space 15).

37 38 39 40 41 42 43 44 45

A musical staff with a treble clef. It contains nine notes: 37. A5 (space 9), 38. B5 (space 10), 39. C6 (space 11), 40. D6 (space 12), 41. E6 (space 13), 42. F6 (space 14), 43. G6 (space 15), 44. A6 (space 16), 45. B6 (space 17).

Basic Elements of Music

(Video tutorial <https://www.stephenhillcomposer.com/copy-of-video-lessons-basic-element>)

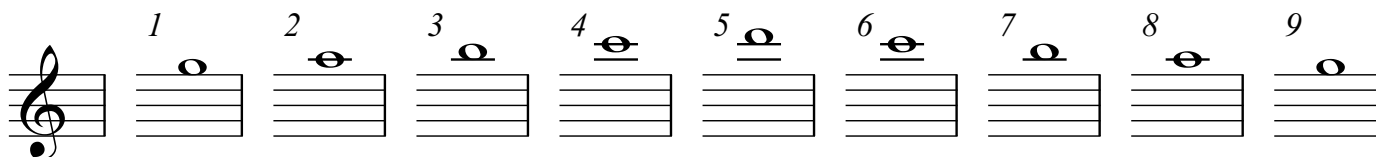
Time _____

Name _____

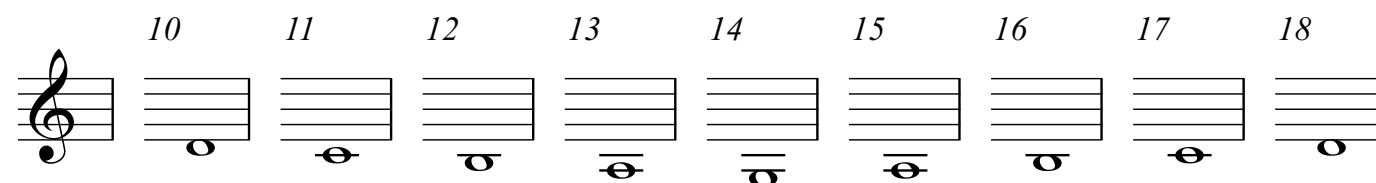
Note Names Ledger Lines and Spaces - Speed Sheet 2 (Treble)

Write the letter name below the note.

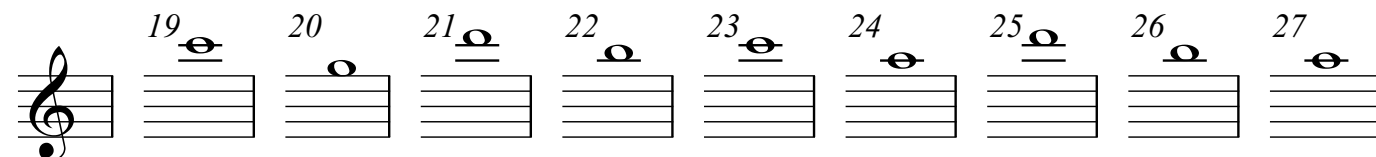
1 2 3 4 5 6 7 8 9



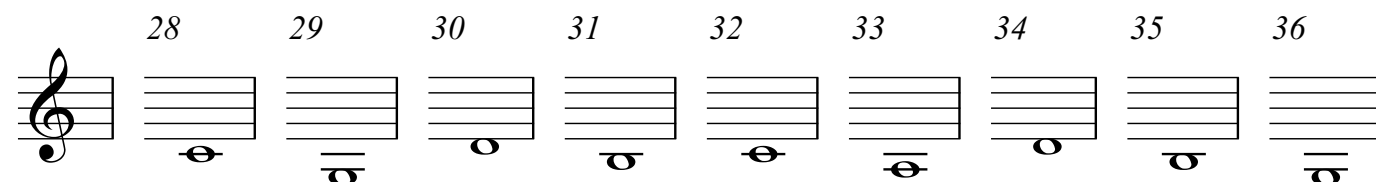
10 11 12 13 14 15 16 17 18



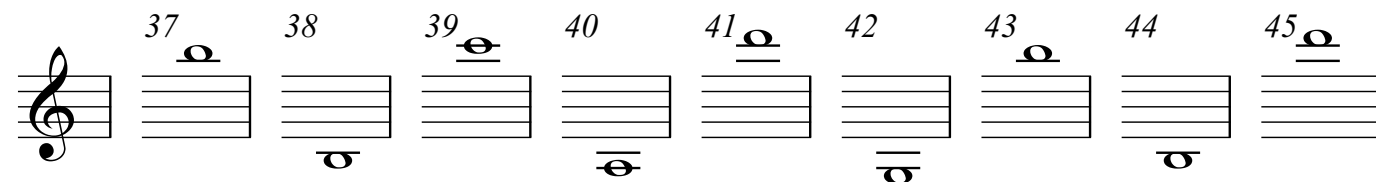
19 20 21 22 23 24 25 26 27



28 29 30 31 32 33 34 35 36



37 38 39 40 41 42 43 44 45



Basic Elements of Music

(Video tutorial <https://www.stephenhillcomposer.com/copy-of-video-lessons-basic-element>)

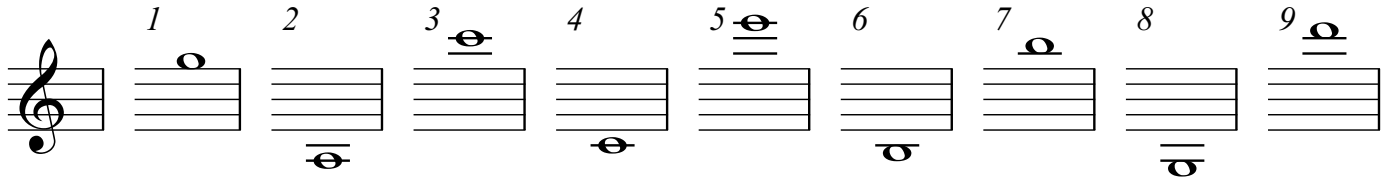
Time _____

Name _____

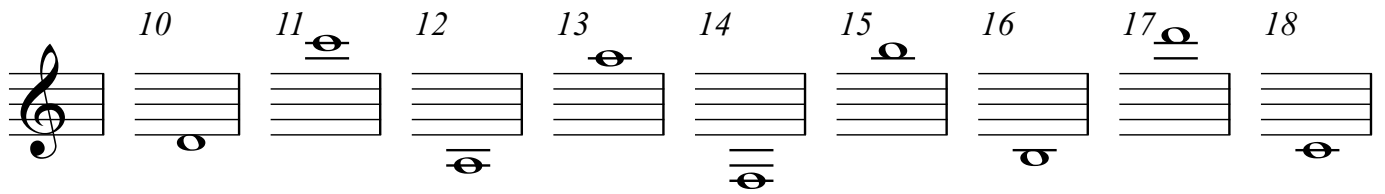
Note Names Ledger Lines and Spaces - Speed Sheet 3 (Treble)

Write the letter name below the note.

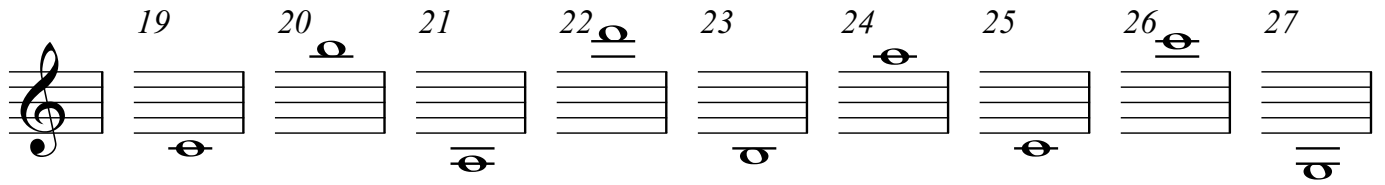
1 2 3 4 5 6 7 8 9




10 11 12 13 14 15 16 17 18



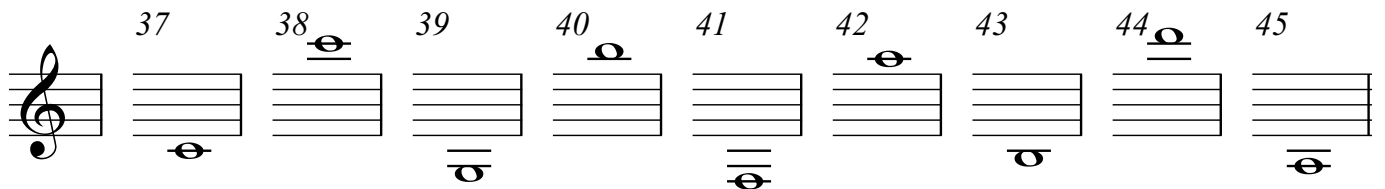
19 20 21 22 23 24 25 26 27



28 29 30 31 32 33 34 35 36



37 38 39 40 41 42 43 44 45



Basic Elements of Music

(Video tutorial <https://www.stephenhillcomposer.com/copy-of-video-lessons-basic-element>)

Time _____

Name _____

Note Names Ledger Lines and Spaces - Speed Sheet 1 (Bass)

Write the letter name below the note.

1 2 3 4 5 6 7 8 9

10 11 12 13 14 15 16 17 18

19 20 21 22 23 24 25 26 27

28 29 30 31 32 33 34 35 36

37 38 39 40 41 42 43 44 45

Basic Elements of Music

(Video tutorial <https://www.stephenhillcomposer.com/copy-of-video-lessons-basic-element>)

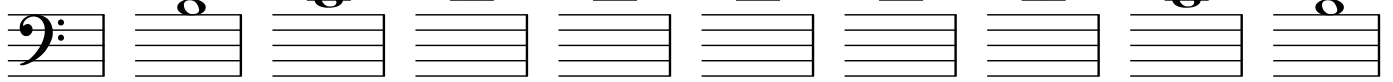
Time _____

Name _____

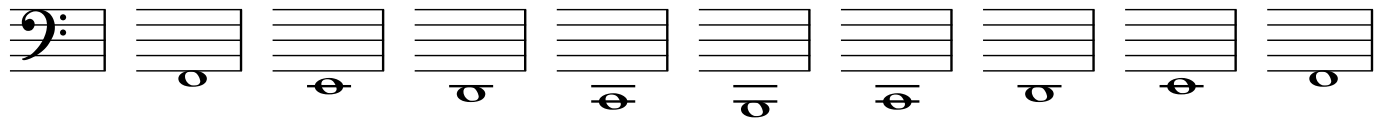
Note Names Ledger Lines and Spaces - Speed Sheet 2 (Bass)

Write the letter name below the note.

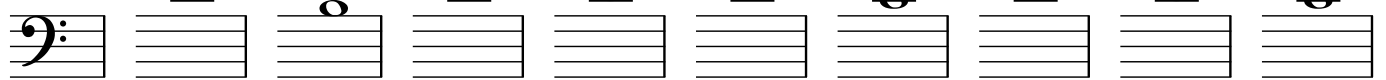
1 2 3 4 5 6 7 8 9



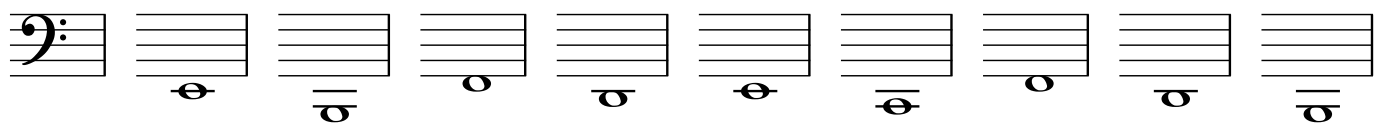
10 11 12 13 14 15 16 17 18



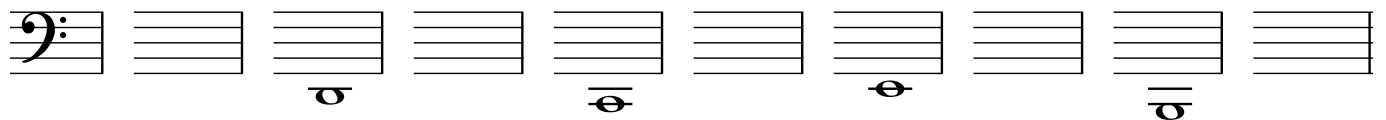
19 20 21 22 23 24 25 26 27



28 29 30 31 32 33 34 35 36



37 38 39 40 41 42 43 44 45



Basic Elements of Music

(Video tutorial <https://www.stephenhillcomposer.com/copy-of-video-lessons-basic-element>)

Time _____

Name _____

Note Names Ledger Lines and Spaces - Speed Sheet 3 (Bass)

Write the letter name below the note.

1 2 3 4 5 6 7 8 9

10 11 12 13 14 15 16 17 18

19 20 21 22 23 24 25 26 27

28 29 30 31 32 33 34 35 36

37 38 39 40 41 42 43 44 45

Basic Elements of Music

(Video tutorial <https://www.stephenhillcomposer.com/copy-of-video-lessons-basic-element>)

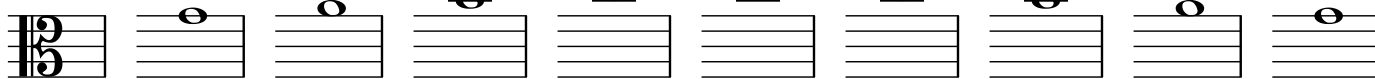
Time _____

Name _____

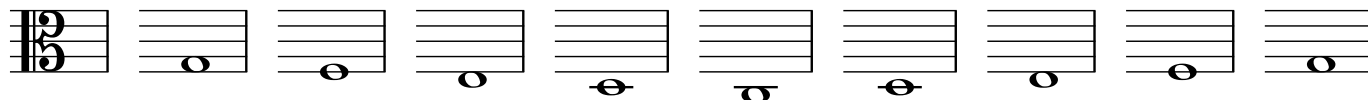
Note Names Ledger Lines and Spaces - Speed Sheet 1 (Alto)

Write the letter name below the note.


1 2 3 4 5 6 7 8 9



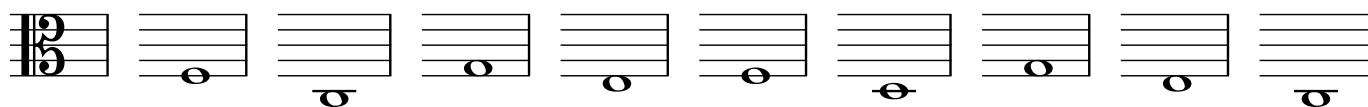
10 11 12 13 14 15 16 17 18



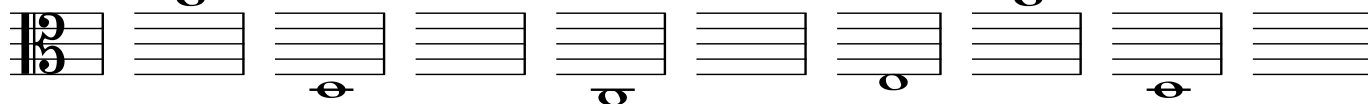
19 20 21 22 23 24 25 26 27



28 29 30 31 32 33 34 35 36



37 38 39 40 41 42 43 44 45



Basic Elements of Music

(Video tutorial <https://www.stephenhillcomposer.com/copy-of-video-lessons-basic-element>)

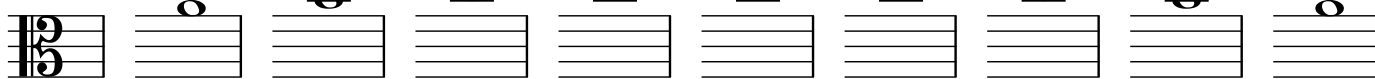
Time _____

Name _____

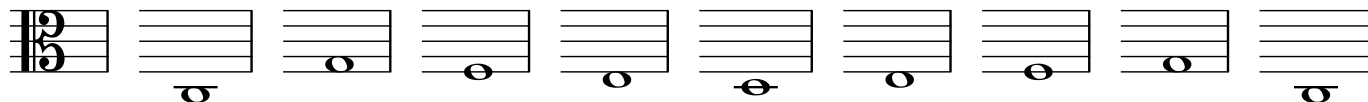
Note Names Ledger Lines and Spaces - Speed Sheet 2 (Alto)

Write the letter name below the note.


1 2 3 4 5 6 7 8 9



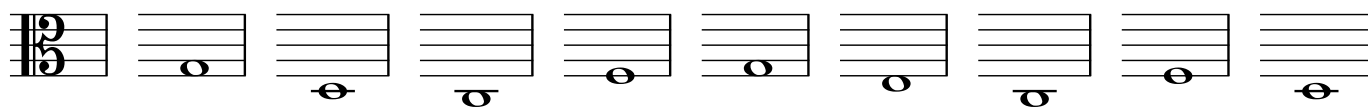
10 11 12 13 14 15 16 17 18



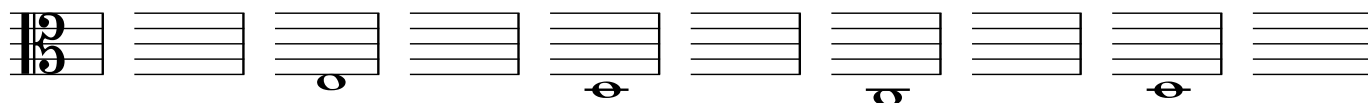
19 20 21 22 23 24 25 26 27



28 29 30 31 32 33 34 35 36



37 38 39 40 41 42 43 44 45



Basic Elements of Music

(Video tutorial <https://www.stephenhillcomposer.com/copy-of-video-lessons-basic-element>)

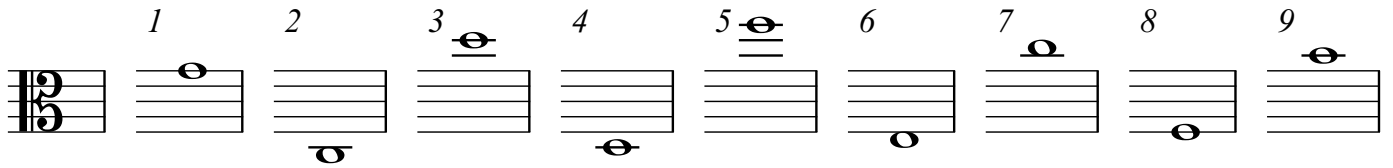
Time _____

Name _____

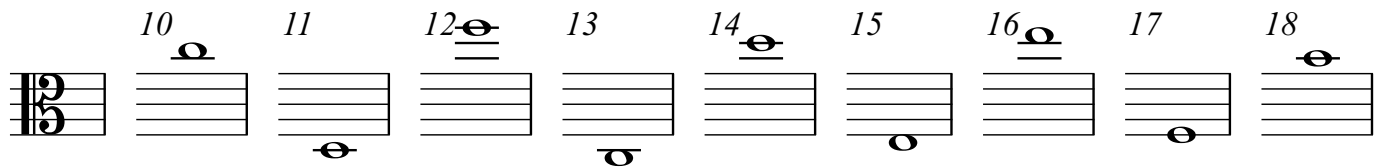
Note Names Ledger Lines and Spaces - Speed Sheet 3 (Alto)

Write the letter name below the note.

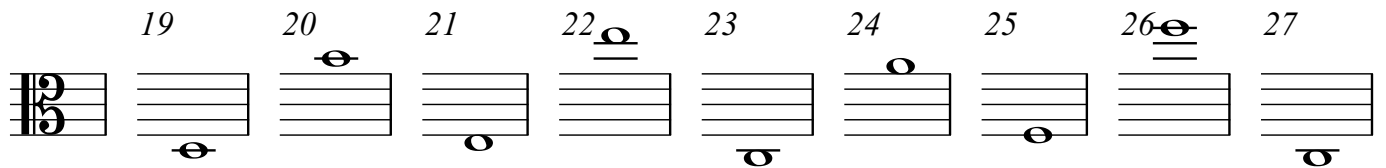
1 2 3 4 5 6 7 8 9




10 11 12 13 14 15 16 17 18



19 20 21 22 23 24 25 26 27



28 29 30 31 32 33 34 35 36



37 38 39 40 41 42 43 44 45

