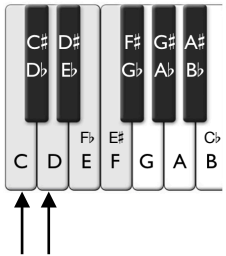


Time _____

Name _____

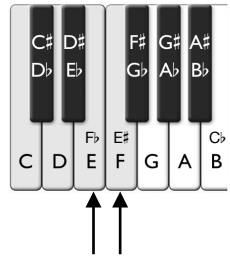
Lesson 30. Whole and Half Steps - Speed Sheet 1 (Circle the correct answer.)

1.



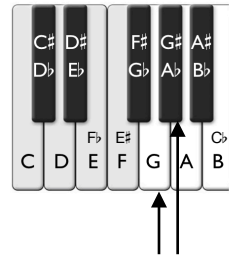
Whole Step / Half Step

2.



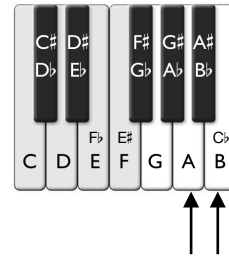
Whole Step / Half Step

3.



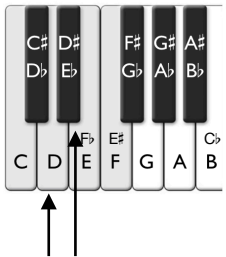
Whole Step / Half Step

4.



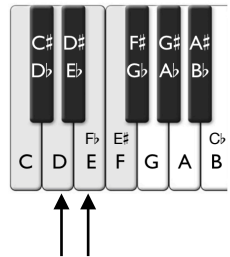
Whole Step / Half Step

5.



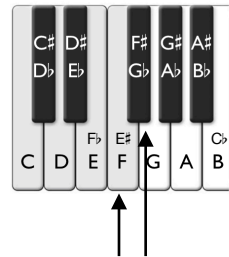
Whole Step / Half Step

6.



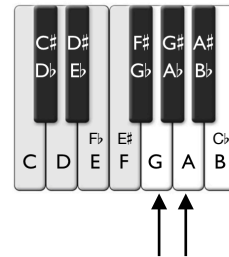
Whole Step / Half Step

7.



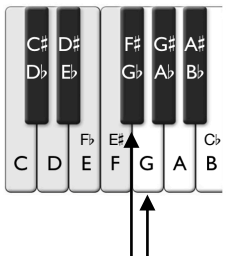
Whole Step / Half Step

8.



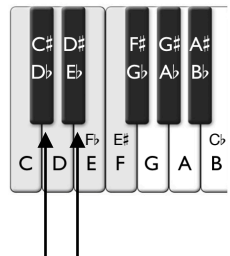
Whole Step / Half Step

9.



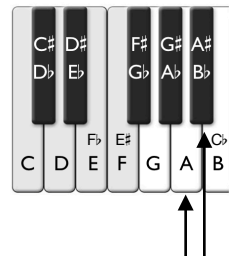
Whole Step / Half Step

10.



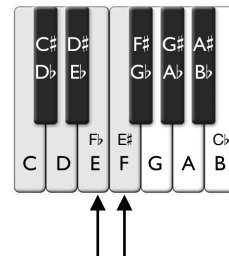
Whole Step / Half Step

11.



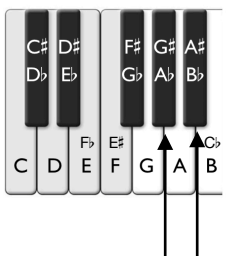
Whole Step / Half Step

12.



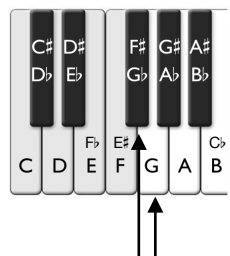
Whole Step / Half Step

13.



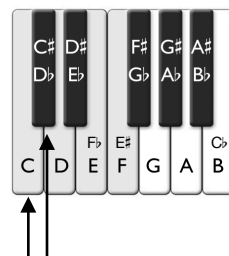
Whole Step / Half Step

14.



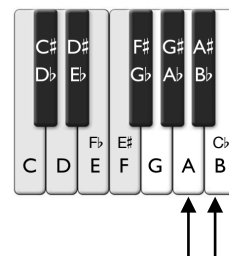
Whole Step / Half Step

15.



Whole Step / Half Step

16.



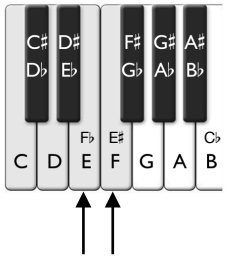
Whole Step / Half Step

Time _____

Name _____

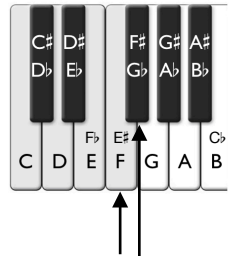
Lesson 30. Whole and Half Steps - Speed Sheet 2 (Circle the correct answer.)

1.



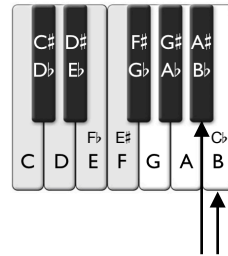
Whole Step / Half Step

2.



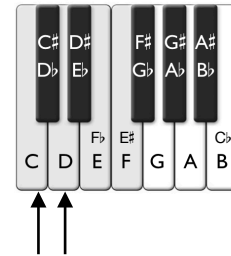
Whole Step / Half Step

3.



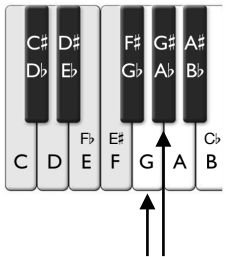
Whole Step / Half Step

4.



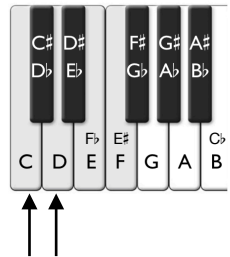
Whole Step / Half Step

5.



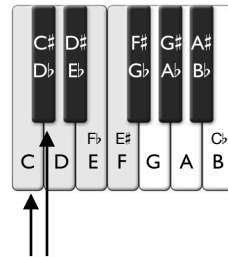
Whole Step / Half Step

6.



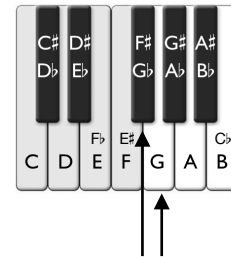
Whole Step / Half Step

7.



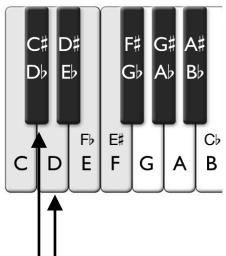
Whole Step / Half Step

8.



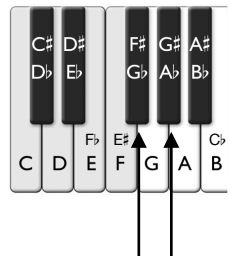
Whole Step / Half Step

9.



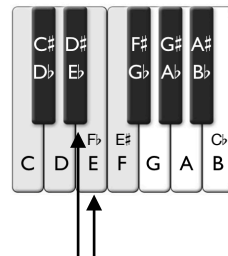
Whole Step / Half Step

10.



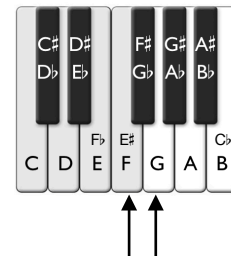
Whole Step / Half Step

11.



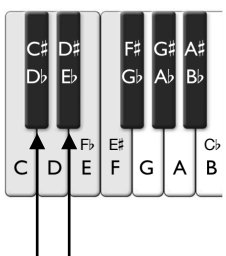
Whole Step / Half Step

12.



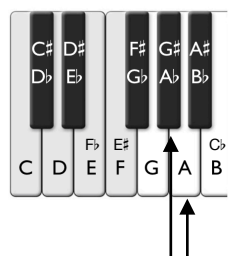
Whole Step / Half Step

13.



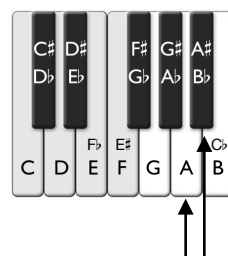
Whole Step / Half Step

14.



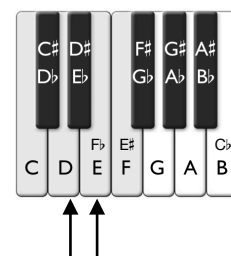
Whole Step / Half Step

15.



Whole Step / Half Step

16.



Whole Step / Half Step