


Basic Elements of Music

(Video tutorial <https://www.stephenhillcomposer.com/copy-of-video-lessons-basic-element>)

Time _____

Name _____

Lesson 10 - Note Values - Speed Sheet 1

 - Whole Note
  - Half Note
  - Quarter Note
  - Eighth Note
  - Sixteenth Note
 W H Q E S

Use the first letter of the Note Value name to identify the note value. The first 5 have been done for you.

1 2 3 4 5 6 7 8




W H Q E S _____ _____ _____


9 10 11 12 13 14 15



16 17 18 19 20 21



22 23 24 25 26 27 28




29 30 31 32 33 34 35



36 37 38 39 40



41 42 43 44 45



Basic Elements of Music















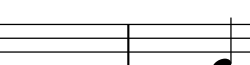









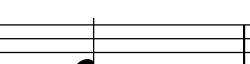







(Video tutorial <https://www.stephenhillcomposer.com/copy-of-video-lessons-basic-element>)

Time _____

Name _____

Lesson 10 - Note Values - Speed Sheet 2

Write the first letter of the Note Value name to identify the note value. The first 5 have been done for you.

1	2	3	4	5
				
<u>W</u>	<u>H</u>	<u>Q</u>	<u>E</u>	<u>S</u>
6	7	8	9	10
				
_____	_____	_____	_____	_____
11	12	13	14	15
				
_____	_____	_____	_____	_____
16	17	18	19	20
				
_____	_____	_____	_____	_____
21	22	23	24	25
				
_____	_____	_____	_____	_____
26	27	28	29	30
				
_____	_____	_____	_____	_____
31	32	33	34	35
				
_____	_____	_____	_____	_____

Basic Elements of Music

(Video tutorial <https://www.stephenhillcomposer.com/copy-of-video-lessons-basic-element>)

Time _____

Name _____

Lesson 10 - Note Values - Speed Sheet 3

Write the first letter of the Note Value name to identify the note value.

1 2 3 4 5

6 7 8 9 10

11 12 13 14 15

16 17 18 19 20

21 22 23 24 25

26 27 28 29 30

31 32 33 34 35

Basic Elements of Music

(Video tutorial <https://www.stephenhillcomposer.com/copy-of-video-lessons-basic-element>)

Time: _____

Name: _____

Lesson 10 - Note Values - Speed Sheet 5

Write the first letter of the Note Value name to identify the note value.

1 2 3 4 5

6 7 8 9 10

11 12 13 14 15

16 17 18 19 20

21 22 23 24 25

26 27 28 29 30

31 32 33 34 35

Basic Elements of Music


(Video tutorial <https://www.stephenhillcomposer.com/copy-of-video-lessons-basic-element>)

Name _____


Manuscript Practice #1

Draw 10 examples of the note value shown for each line


A 1. 2. 3. 4. 5. 6. 7. 8. 9. 10.




B 1. 2. 3. 4. 5. 6. 7. 8. 9. 10.




C 1. 2. 3. 4. 5. 6. 7. 8. 9. 10.




D 1. 2. 3. 4. 5. 6. 7. 8. 9. 10.



E 1. 2. 3. 4. 5. 6. 7. 8. 9. 10.



F 1. 2. 3. 4. 5. 6. 7. 8. 9. 10.




Name _____


Manuscript Practice #2

Draw 10 examples of the note value shown for each line


A 1. 2. 3. 4. 5. 6. 7. 8. 9. 10.




B 1. 2. 3. 4. 5. 6. 7. 8. 9. 10.




C 1. 2. 3. 4. 5. 6. 7. 8. 9. 10.



D 1. 2. 3. 4. 5. 6. 7. 8. 9. 10.



E 1. 2. 3. 4. 5. 6. 7. 8. 9. 10.



F 1. 2. 3. 4. 5. 6. 7. 8. 9. 10.

