




Time: \_\_\_\_\_

Name \_\_\_\_\_ **Answer Key**

## 12. Rest Names - Speed Sheet 1


 - Whole Rest

 - Half Rest

 - Quarter Rest


Use the first letter of the Rest name to identify the Rest value.

2    3    4




W    H    Q    H

5    6    7    8




W    Q    H    W

9    10    11    12




W    Q    H    H

13    14    15    16



W    Q    H    Q

17    18    19    20



W    H    Q    W

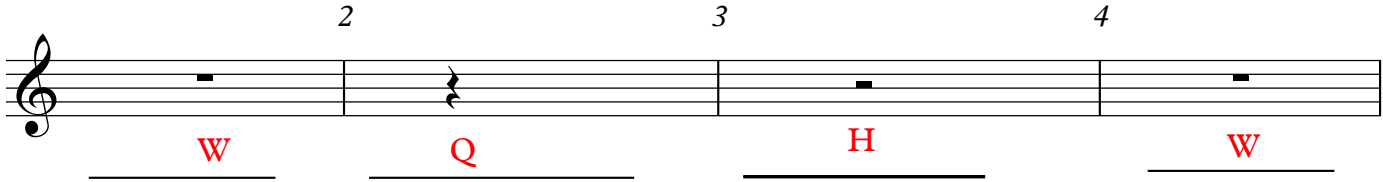
Time: \_\_\_\_\_

Name \_\_\_\_\_ **Answer Key**

# 12. Rest Names - Speed Sheet 2

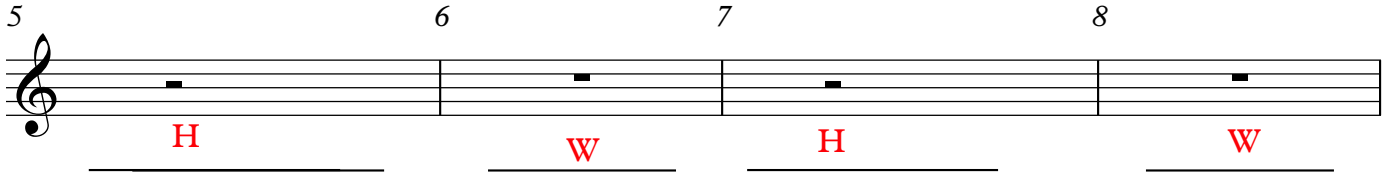
Use the first letter of the Rest name to identify the Rest value.

2                                      3                                      4



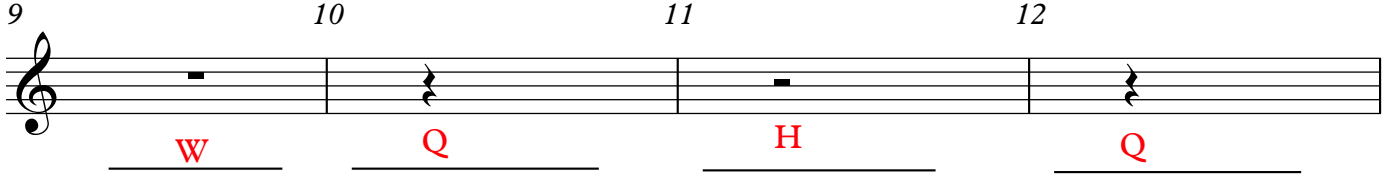
\_\_\_\_\_ W                      \_\_\_\_\_ Q                      \_\_\_\_\_ H                      \_\_\_\_\_ W

5                                      6                                      7                                      8




\_\_\_\_\_ H                      \_\_\_\_\_ W                      \_\_\_\_\_ H                      \_\_\_\_\_ W

9                                      10                                      11                                      12




\_\_\_\_\_ W                      \_\_\_\_\_ Q                      \_\_\_\_\_ H                      \_\_\_\_\_ Q

13                                      14                                      15                                      16



\_\_\_\_\_ Q                      \_\_\_\_\_ H                      \_\_\_\_\_ W                      \_\_\_\_\_ H

17                                      18                                      19                                      20



\_\_\_\_\_ Q                      \_\_\_\_\_ W                      \_\_\_\_\_ Q                      \_\_\_\_\_ H